

Impedance Imaging, Inverse Problems, and Harry Potter’s Cloak*

Kurt Bryan[†]
Tanya Leise[‡]

Abstract. In this article we provide an accessible account of the essential idea behind cloaking, aimed at nonspecialists and undergraduates who have had some vector calculus, Fourier series, and linear algebra. The goal of cloaking is to render an object invisible to detection from electromagnetic energy by surrounding the object with a specially engineered “metamaterial” that redirects electromagnetic waves around the object. We show how to cloak an object against detection from impedance tomography, an imaging technique of much recent interest, though the mathematical ideas apply to much more general forms of imaging. We also include some exercises and ideas for undergraduate research projects.

Key words. electrical impedance tomography, cloaking, metamaterial, Dirichlet-to-Neumann map, Laplace’s equation, inverse problem

AMS subject classifications. 35R30, 35-01

DOI. 10.1137/090757873

I. Introduction. In the climactic scene of *Harry Potter and the Half-Blood Prince* by J. K. Rowling, a magically petrified Harry watches helplessly as Severus Snape uses the *Avada Kedavra* curse to kill Albus Dumbledore. Harry himself escapes the notice of Draco Malfoy and the other Death Eaters due to the protection of his invisibility cloak, which proves itself invaluable throughout Harry’s adventures. The essential property of the cloak isn’t simply that it conceals the person underneath—a bed sheet would suffice for that purpose. But by rendering the wearer invisible, the cloak actually conceals the fact that anything at all is being concealed!

Cloaking and invisibility are old staples of popular fiction, especially science fiction, from Romulan ships in “Star Trek” to the Predator’s light-bending armor. The pseudo-explanation usually given is that “the selective bending of light rays” (to quote Mr. Spock) around the object to be cloaked can render the object invisible. But with the laws of physics in the real world, is this possible, even in theory? Physicists and mathematicians have recently found that the answer to this question is a qualified “yes.”

The key to cloaking in real life is to engineer a “metamaterial” with special microstructure that bends electromagnetic waves in a quantifiable and controllable

*Received by the editors May 4, 2009; accepted for publication (in revised form) November 12, 2009; published electronically May 6, 2010.

<http://www.siam.org/journals/sirev/52-2/75787.html>

[†]Department of Mathematics, Rose-Hulman Institute of Technology, Terre Haute, IN 47803 (kurt.bryan@rose-hulman.edu).

[‡]Department of Mathematics, Amherst College, Amherst, MA 01002 (tleise@amherst.edu).

way. Scientists and engineers have already made some progress toward designing and constructing metamaterials that successfully cloak objects in certain restricted circumstances. Indeed, cloaking is listed as No. 2 on *New Scientist's* top-ten list of “sci-fi devices you could soon hold in your hands” [22] and has been a hot topic in other popular science news [10, 25].

In 2006, John Pendry, David Schurig, and David Smith published an idea for a cloak that would render an object in two or more dimensions invisible to probing by electromagnetic waves at a fixed frequency by surrounding it with a specially designed metamaterial [24]. Soon afterward, Smith’s group at Duke University constructed a working device based on a variant of that idea [26], and in January 2009 they reported constructing a device that works for a broad range of frequencies in two dimensions [18]. The same techniques could, in principle, be scaled to work at optical wavelengths. Greenleaf, Lassas, and Uhlmann [6] had already described essentially the same notion back in 2003, in a study of the inverse problem for electrical impedance tomography posed by Calderón. This group has more recently developed a “double-coating” that can cloak actively radiating sources (e.g., a light source) [7]. For a brief overview of metamaterials and cloaking, see [14]; for in-depth reviews, see [8, 9]; and for other approaches to developing cloaks, see [1, 13, 15, 16, 17, 18, 19, 20, 21, 28, 29].

This article provides an elementary but quantitative, mathematically honest account of the essential idea behind cloaking, following the change of variables method described in [6] and [13], in a way that is entirely accessible to nonspecialists and undergraduates.

2. The Basic Model.

2.1. Electrical Conduction. The goal of cloaking is to render an object invisible, so that even observers who look directly at the object cannot see it. The words “look” and “see” here refer to observers using electromagnetic waves in some form to image objects. The observer might actively illuminate the object, for example, with radar, or merely make use of ambient electromagnetic waves such as sunlight: it doesn’t matter. In this section we’ll develop a mathematical model for an electromagnetic imaging technique known as *electrical impedance tomography* that makes it fairly easy to illustrate the idea behind cloaking. In the next section we’ll show how to cloak an object so that it is rendered almost or completely invisible to this type of imaging. The techniques apply to much more general electromagnetic imaging methodologies, however. Indeed, the principles have found application in situations that have little to do with cloaking or electromagnetics but in which wavelike phenomena appear, e.g., sound waves, water waves, and even earthquakes [2]!

We might think of the imaging process as taking place in “free space,” that is, in \mathbb{R}^2 or \mathbb{R}^3 , but for this exposition it will be simpler to work on a bounded domain Ω . We assume, for convenience only, that Ω is the open unit disk in \mathbb{R}^2 and use rectangular coordinates (x_1, x_2) . We use $\partial\Omega$ to denote the boundary of Ω , the unit circle. Suppose an object is contained in Ω and an external observer attempts to image this object using electromagnetic waves in some form. However, the observer is confined to work only on $\partial\Omega$. The observer injects electromagnetic waves into Ω , looks at what comes out, and then tries to deduce the interior structure.

In general one uses Maxwell’s equations to quantify the behavior of electromagnetic fields, but this is unnecessarily complicated for our problem. Some simplification could be obtained by modeling the situation with the *wave equation*. A function $u(x_1, x_2, t)$ satisfies the wave equation if $\frac{\partial^2 u}{\partial t^2} - c^2 \Delta u = 0$, where c is the speed of

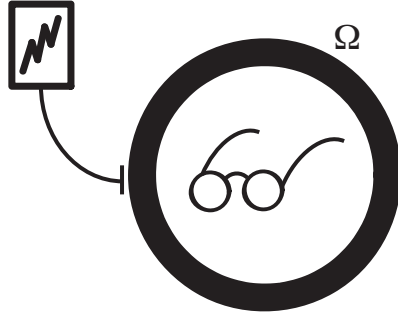


Fig. 2.1 A region Ω hiding an object from an external observer.

light and $\Delta = \frac{\partial^2}{\partial x_1^2} + \frac{\partial^2}{\partial x_2^2}$, the *Laplacian* operator. For example, the components of the electric and magnetic fields in empty space obey the wave equation. We’ll take this simplification one step further by considering only steady-state or DC imaging, in which all quantities are independent of time. Moreover, the interior of Ω (even when “empty”) will consist not of empty space but rather of an electrically conductive material. As we describe in more detail below, the observer will use measured electrical currents and voltages to image the interior of Ω .

Let’s start by quantifying what we mean when we say that the interior of Ω is “empty.” A material is said to be *homogeneous* if its physical properties are the same at all points and is said to be *isotropic* if the material has no directional properties. A block of wood, for example, might be (approximately) homogeneous but not isotropic, since the orientation of the grain introduces direction-dependent physical behavior. A material that is not isotropic is *anisotropic*. We will say that the region Ω is empty if the interior of Ω is filled with an electrically conductive material that is homogeneous and isotropic with regard to electrical conduction; we assume this is the condition in which an external observer expects to find Ω . Of course, if we place an object inside Ω , the object may not have the same electrical properties and will alter the way electrical current flows inside Ω . This alteration can be used to detect and image the object from outside of Ω .

2.1.1. Isotropic Conduction. To quantify all of this, let $u(x_1, x_2)$ denote the electric potential (the “voltage”) at the point $(x_1, x_2) \in \Omega$. The electric field \mathbf{E} (a vector field) in Ω satisfies $\mathbf{E} = -\nabla u$. The electric field pushes on conduction electrons and impels a current to flow, though we’ll use the “conventional current” model, in which positive charge flows—it doesn’t matter. Let \mathbf{J} denote the vector field in Ω that describes the flow of current. The simplest model for how \mathbf{J} depends on \mathbf{E} , and hence u , is

$$(2.1) \quad \mathbf{J} = \gamma \mathbf{E},$$

where γ is the *conductivity*. In the case of a homogeneous isotropic material, γ is simply a nonnegative constant, but more generally γ can be a function of position (x_1, x_2) or, in the anisotropic case, a matrix; see section 2.1.2 below. Equation (2.1) is in some sense just a two-dimensional version of Ohm’s law and posits a linear relationship between the electric field and current flux, with current always flowing in the direction of \mathbf{E} . If γ is large, then a lot of current flows for a given electric field strength, whereas when γ is close to zero very little current flows. The extreme case,

$\gamma = 0$, corresponds to a perfect insulator—no matter how strong the electric field, no current will flow.

From $\mathbf{E} = -\nabla u$ and (2.1) we obtain

$$(2.2) \quad \mathbf{J} = -\gamma \nabla u.$$

If electric charge is conserved in Ω , as it must be if there are no current sources inside, we have $\nabla \cdot \mathbf{J} = 0$ throughout the interior of Ω . With (2.2) this implies

$$(2.3) \quad \nabla \cdot \gamma \nabla u = 0 \quad \text{in } \Omega.$$

In the special case that γ is a constant (that is, when Ω is empty) we can simplify (2.3) to *Laplace's equation*

$$(2.4) \quad \Delta u = 0 \quad \text{in } \Omega,$$

where $u = u(x_1, x_2)$. This is the partial differential equation that must be satisfied by the electric potential u inside a homogeneous isotropic conductor. Functions that satisfy (2.4) are said to be *harmonic*. It's easy to see that any constant function u satisfies (2.4) (which from (2.2) corresponds to zero current everywhere in Ω) but the more interesting case occurs when the current is nonzero, and this requires a nonconstant potential in Ω .

How can one obtain a nonconstant potential inside Ω ? By inducing a nonconstant potential f on $\partial\Omega$, e.g., by attaching electrodes to $\partial\Omega$, so that

$$(2.5) \quad u = f \quad \text{on } \partial\Omega$$

for some chosen function f . Equation (2.5) is a *Dirichlet* boundary condition, and f is the *Dirichlet data*.

Laplace's equation (2.4) and the Dirichlet boundary condition (2.5) together constitute a very standard boundary value problem, with a unique solution u for any reasonable (e.g., continuous) applied potential f . But we have not yet accounted for the presence of an object inside Ω , so equation (2.4) is appropriate only for an empty container Ω . In a later section we show how to model and detect the presence of a nonconductive “hole” inside Ω .

Exercise 1. Suppose we parameterize the boundary of the disk in the usual way, as $x_1 = \cos \theta, x_2 = \sin \theta, 0 \leq \theta < 2\pi$. Let the Dirichlet data at the corresponding point on $\partial\Omega$ be given by $f(\theta) = a \cos \theta + b \sin \theta + c$ for constants a, b, c . Show that the solution to (2.4)–(2.5) is the harmonic function $u(x_1, x_2) = ax_1 + bx_2 + c$.

2.1.2. Anisotropic Conduction. Many materials exhibit anisotropic physical properties. In the context of electrical conduction, this means that at any given point a material may conduct better in some directions than in others, and so the conduction model of equation (2.1) with γ as a scalar is inappropriate. A natural generalization of (2.1) is to assume that at any given point the material has a direction of maximum conductivity and a direction of minimum conductivity. Let us suppose that the material has maximum conductivity $\gamma_M > 0$ in the direction of the unit vector \mathbf{v}_M and minimum conductivity $\gamma_m > 0$ in the direction of the unit vector \mathbf{v}_m , so $0 < \gamma_m \leq \gamma_M$. It's also natural to assume that the direction vectors \mathbf{v}_M and \mathbf{v}_m are orthogonal to each other. A model that captures this behavior is

$$(2.6) \quad \mathbf{J} = \sigma \mathbf{E},$$

where σ is a symmetric positive definite 2×2 matrix (σ may depend on position), since symmetric positive definite matrices have orthogonal eigenvectors and positive eigenvalues. (Recall that a matrix \mathbf{A} is *positive definite* if $\mathbf{v}^T \mathbf{A} \mathbf{v} > 0$ for all nonzero vectors \mathbf{v} , where \mathbf{v}^T is the transpose of \mathbf{v} .) The converse is also true: a matrix with an orthogonal basis of eigenvectors and positive eigenvalues is a positive definite symmetric matrix.

For anisotropic conduction, (2.6) replaces (2.1), and (2.3) becomes

$$(2.7) \quad \nabla \cdot \sigma \nabla u = 0 \quad \text{in } \Omega.$$

If an electric field \mathbf{E} is applied in a direction that is parallel to \mathbf{v}_M , then the resulting current flux is $\mathbf{J} = \sigma \mathbf{E} = \gamma_M \mathbf{E}$ so that $\|\mathbf{J}\| = \gamma_M \|\mathbf{E}\|$. For a fixed magnitude of $\|\mathbf{E}\|$, this direction for \mathbf{E} (parallel to \mathbf{v}_M) maximizes $\|\mathbf{J}\|$; see Exercise 4 below. Similarly, taking \mathbf{E} parallel to \mathbf{v}_m minimizes $\|\mathbf{J}\|$.

Exercise 2. What 2×2 matrix σ models an isotropic conductor with (scalar) conductivity γ in all directions?

Exercise 3. Write out an anisotropic conductivity matrix σ to model a homogeneous material with general conductivity γ_M in the direction of the unit vector $\mathbf{v}_M = \frac{\sqrt{2}}{2} \hat{i} + \frac{\sqrt{2}}{2} \hat{j}$ and conductivity γ_m in the direction of the unit vector $\mathbf{v}_m = \frac{\sqrt{2}}{2} \hat{i} - \frac{\sqrt{2}}{2} \hat{j}$. *Hint:* use the fact that σ can be diagonalized as $\sigma = \mathbf{P} \mathbf{D} \mathbf{P}^{-1} = \mathbf{P} \mathbf{D} \mathbf{P}^T$, where \mathbf{P} is the matrix with the eigenvectors of σ as columns and \mathbf{D} the diagonal matrix of eigenvalues (in the same order as the columns of \mathbf{P}). For a given \mathbf{E} , how does the quantity $\sigma \mathbf{E}$ behave as $\gamma_m \rightarrow 0^+$?

Exercise 4. Show that if σ is a symmetric positive definite $n \times n$ matrix and we fix $\|\mathbf{v}\| = 1$, then $\|\sigma \mathbf{v}\|^2$ is maximized when \mathbf{v} is an eigenvector for σ corresponding to the largest eigenvalue(s) for σ . *Hint:* we can write

$$\mathbf{v} = \sum_{k=1}^n \alpha_k \mathbf{v}_k$$

for some scalars α_k , where the \mathbf{v}_k are orthonormal eigenvectors for σ ; assume that the corresponding eigenvalues are ordered $0 < \lambda_1 \leq \lambda_2 \leq \dots \leq \lambda_n$. Then $\|\mathbf{v}\|^2$ and $\|\sigma \mathbf{v}\|^2$ can be written out quite explicitly in terms of the α_k and λ_k .

2.2. Impedance Tomography. In *impedance tomography* one attempts to image the interior of Ω by applying an electrical current to $\partial\Omega$, say, by attaching many electrodes to $\partial\Omega$. The applied current on the boundary induces a spatially varying potential (i.e., voltage) throughout the interior of Ω , which induces current to flow through the interior. The current must enter or leave Ω through the attached electrodes, and the resulting potential on $\partial\Omega$ (which can be measured) depends on the interior properties of Ω . From this type of information—applied current and resulting voltage—one can deduce information about the interior electrical properties of Ω , such as the conductivity, and thereby form images. See Figure 2.2 for an example of an image of the heart and lungs obtained from an actual impedance imaging system. The articles [5] and [11] provide a good general overview of the subject.

2.2.1. Imaging Voids. Let's look at how one might image certain special types of objects in Ω with this approach. We take the equivalent but more mathematically convenient approach of applying a potential and then measuring the resulting current on $\partial\Omega$. The key is to determine the mapping between the applied potential and the resulting current on the boundary of an object and how that mapping depends on the interior properties of Ω .

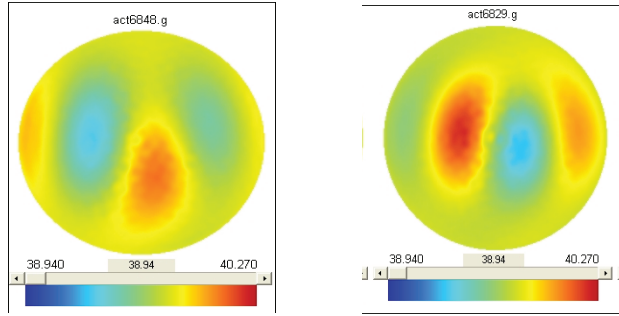


Fig. 2.2 *The image on the left is an impedance image of a cross section of the torso, taken as blood was filling the subject's heart and leaving the lungs. The area near the heart shows up as red, for the conductivity at this moment is high (blood is very conductive). In contrast, the lungs have little blood in them at this moment and are shown in blue. In the image on the right, the blood has left the heart and entered the lungs, reversing the colors. (Our thanks to David Isaacson and the Electrical Impedance Imaging group at the Rensselaer Polytechnic Institute for supplying us with these images, obtained from their ACT III impedance imaging system.)*

To begin, assume Ω is empty, that is, has homogeneous isotropic conductivity $\gamma > 0$. Suppose we place a nonconductive object D inside Ω ; think of D as a void, that is, as missing material. When a potential f is applied to $\partial\Omega$, the presence of the void disrupts the flow of current inside Ω , and this effect should be observable from the boundary. The quantity we will observe is the rate at which electric current flows into Ω at each point on $\partial\Omega$. The rate at which current flows out near a point $p \in \partial\Omega$ is $\mathbf{J}(p) \cdot \mathbf{n}(p)$, where $\mathbf{n}(p)$ is an outward pointing unit normal vector to $\partial\Omega$ at the point p . We will henceforth suppress the dependence of quantities like ∇u or \mathbf{n} on p . Application of equation (2.2) shows that the current flowing out across $\partial\Omega$ at any given point is $-\gamma \nabla u \cdot \mathbf{n}$. The rate at which current *enters* $\partial\Omega$ is thus $\gamma \nabla u \cdot \mathbf{n}$, and is called the *Neumann data* for the function u .

The presence of D in Ω alters the flow of current, for no current can flow into D from $\Omega \setminus D$. This means that $\mathbf{J} \cdot \mathbf{n} = 0$ on ∂D , where here \mathbf{n} denotes a unit normal vector on ∂D , say, pointing into D (out of $\Omega \setminus D$). From equation (2.2) we obtain $\gamma \nabla u \cdot \mathbf{n} = 0$ on ∂D . In this case the potential u is defined only in $\Omega \setminus D$ and obeys Laplace's equation there, along with the Dirichlet boundary condition (2.5) on $\partial\Omega$ and the additional boundary condition

$$(2.8) \quad \gamma \nabla u \cdot \mathbf{n} = 0 \quad \text{on } \partial D.$$

Since $\gamma > 0$ we can also write (2.8) as simply $\frac{\partial u}{\partial \mathbf{n}} = 0$, using the shorthand notation $\frac{\partial u}{\partial \mathbf{n}} := \nabla u \cdot \mathbf{n}$ for the normal derivative.

Example 2.1. Suppose the observer applies the potential $f(\theta) = \cos \theta + \sin \theta$ to the boundary of the disk. From Exercise 1, the resulting potential inside the empty disk is $u(x_1, x_2) = x_1 + x_2$. But if we remove a ball $D = B_{1/2}(\mathbf{0})$ (where we use $B_r(p)$ to denote a ball of radius r centered at the point p , and $\mathbf{0}$ indicates the origin), then $u(x_1, x_2) = x_1 + x_2$ is no longer the potential induced in the annulus $\Omega \setminus D$ by the potential f , for u does not satisfy (2.8). To see this, note that ∂D can be

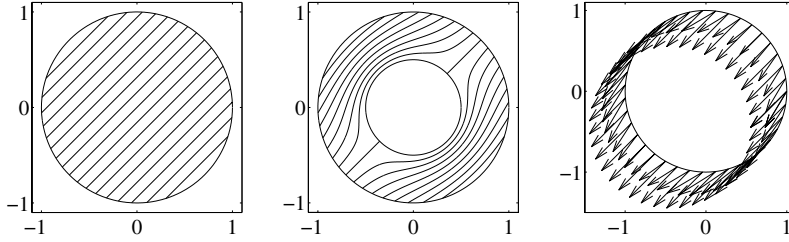


Fig. 2.3 Comparison of solutions on the unit disk and an annulus. The graph on the left shows flow lines of the current $\mathbf{J} = -\gamma\nabla u$, where u is the solution to Laplace's equation with Dirichlet condition $f(\theta) = \cos(\theta) + \sin(\theta)$ (the potential applied by the observer) on the outer boundary of the unit disk. The flow shown in the middle graph has the same applied potential f on the outer boundary plus the Neumann condition of zero flux on the inner boundary of the annulus $1/2 \leq r \leq 1$. The rightmost graph compares \mathbf{J} on the boundary of the disk and the annulus, where the shorter arrows correspond to \mathbf{J} for the annulus.

parameterized as $x_1 = \frac{1}{2} \cos(\theta)$, $x_2 = \frac{1}{2} \sin(\theta)$ with $\mathbf{n} = -\cos(\theta)\hat{i} - \sin(\theta)\hat{j}$. Then

$$\nabla u \cdot \mathbf{n} = (\hat{i} + \hat{j}) \cdot (-\cos(\theta)\hat{i} - \sin(\theta)\hat{j}) = -(\cos(\theta) + \sin(\theta)),$$

which is not identically zero on ∂D . Indeed, in this case the correct potential inside $\Omega \setminus D$ is $u(x_1, x_2) = (x_1 + x_2)(4x_1^2 + 4x_2^2 + 1)/(5x_1^2 + 5x_2^2)$. See Figure 2.3 for graphs of the current flux \mathbf{J} for each case. The nonconductive void impedes the flow of the current, and the observer measures (in (r, θ) polar coordinates) $\frac{\partial u}{\partial \mathbf{n}}(1, \theta) = \frac{3}{5}(\cos \theta + \sin \theta)$ on $\partial \Omega$, compared to $\frac{\partial u}{\partial \mathbf{n}}(1, \theta) = \cos \theta + \sin \theta$ for the intact unit disk.

Exercise 5. Verify that the function $u(x_1, x_2) = (x_1 + x_2)(4x_1^2 + 4x_2^2 + 1)/(5x_1^2 + 5x_2^2)$ of Example 2.1 is in fact harmonic on $\Omega \setminus D$ (where $D = B_{1/2}(\mathbf{0})$) with $u = \cos \theta + \sin \theta$ on $\partial \Omega$ and $\nabla u \cdot \mathbf{n} = 0$ on ∂D .

2.2.2. Inverse Problems and Cloaking. The above discussion suggests an impedance imaging procedure for gathering information about the interior of Ω , in this case, finding a hole in Ω :

1. Apply a potential f to $\partial \Omega$ (equation (2.5)).
2. Measure the response $\gamma \nabla u \cdot \mathbf{n}$ on $\partial \Omega$ (measure the resulting current).

From this kind of “stimulus-response” or Dirichlet–Neumann data we wish to determine the precise size, shape, and location of the hole D . Of course steps 1 and 2 can be repeated with different input potentials f , which might yield additional information. Impedance imaging is an example of an *inverse problem*. The definition of an inverse problem is not set in stone but might be defined roughly as a problem that requires “deducing cause from effect.” In the context of differential equations this often takes the form of deducing the coefficients in a differential equation from knowledge of the solutions, rather than the more traditional “forward” or “direct” problem of finding the solution to a specific differential equation with known coefficients. In our case, the inverse problem is to deduce what interior region D could have yielded the measured boundary current for the applied potential f (instead of being given D and f and asked to compute the boundary current by solving the differential equation). Inverse problems of this form often occur in applications where one wants to deduce interior structure from exterior measurements.

We also have at hand the beginnings of a crude cloak. If we want to hide a conductive object inside Ω , we merely excavate a nonconductive hole of some radius $\rho > 0$ in Ω and place the object inside. The object is thus electrically insulated from the outside world and cannot be seen with impedance imaging. Unfortunately, the hole itself can be seen, so an observer will know that something is being hidden, even if he can't tell what it is. This would be like Harry Potter substituting a bed sheet for his cloak!

However, the idea of excavating a hole into which we can place something is the beginning of a viable cloak, but first we need to analyze Laplace's equation on an annulus $\Omega/B_\rho(\mathbf{0})$ a bit more carefully.

2.3. Solution to Laplace's Equation on the Annulus. Suppose $D = B_\rho(\mathbf{0})$, similar to the middle panel in Figure 2.3, with $\rho < 1$. Our goal is to determine ρ using impedance imaging. An easy way to do this is to solve Laplace's equation with boundary conditions (2.5)–(2.8) explicitly, to see that the value of ρ is in fact encoded in the Neumann data $\gamma \nabla u \cdot \mathbf{n}$ on $\partial\Omega$. The solution to Laplace's equation can be obtained with a standard separation of variables in polar coordinates, which we carry out below. For more information on solving partial differential equations via separation of variables see [27].

In what follows we will assume $\gamma = 1$, though this is merely for convenience.

The domain $\Omega \setminus D$ is an annulus, so it's convenient to write Laplace's equation (2.4) in polar coordinates

$$(2.9) \quad \frac{\partial^2 u}{\partial r^2} + \frac{1}{r} \frac{\partial u}{\partial r} + \frac{1}{r^2} \frac{\partial^2 u}{\partial \theta^2} = 0,$$

where $u = u(r, \theta)$ is the potential in $\Omega \setminus D$. By using (2.9) it's straightforward to check that the functions $1, \ln(r)$, and $r^{|k|} e^{ik\theta}, r^{-|k|} e^{ik\theta}$ for $k \in \mathbb{Z}$ are harmonic for $r > 0$ and hence on the annulus $\Omega \setminus D$. We will construct the relevant solution $u(r, \theta)$ as a superposition of these functions,

$$(2.10) \quad u(r, \theta) = c_0 + d_0 \ln(r) + \sum_{k \in \mathbb{Z} \setminus \{0\}} (c_k r^{|k|} + d_k r^{-|k|}) e^{ik\theta},$$

by choosing the c_k and d_k correctly.

The Dirichlet boundary condition $u = f$ on $\partial\Omega$ means $u(1, \theta) = f(\theta)$, that is,

$$(2.11) \quad c_0 + \sum_{k \in \mathbb{Z} \setminus \{0\}} (c_k + d_k) e^{ik\theta} = f(\theta) \text{ for } \theta \in [0, 2\pi).$$

This looks like the Fourier series of the Dirichlet data f . We assume f is well behaved, e.g., continuous and piecewise differentiable, so that the Fourier series converges pointwise to f . We can expand f in a Fourier series as

$$f(\theta) = \sum_{k \in \mathbb{Z}} f_k e^{ik\theta}, \text{ where } f_k = \frac{1}{2\pi} \int_0^{2\pi} f(\theta) e^{-ik\theta} d\theta.$$

By matching the f_k with the corresponding terms on the left in (2.11) we conclude

$$(2.12) \quad c_0 = f_0 \quad \text{and} \quad c_k + d_k = f_k \text{ for } k \in \mathbb{Z} \setminus \{0\}.$$

To complete the computation we make use of the Neumann boundary condition (2.8), which takes the form $\frac{\partial u}{\partial r} = 0$ on ∂D (using the fact that the vector field \mathbf{n} on ∂D

points radially toward the origin, so $\frac{\partial}{\partial \mathbf{n}} = -\frac{\partial}{\partial r}$ along this inner boundary). Formally taking a term-by-term derivative of (2.10) with respect to r and then evaluating at $r = \rho$ leads to

$$(2.13) \quad \frac{d_0}{\rho} + \sum_{k \in \mathbb{Z} \setminus \{0\}} |k|(c_k \rho^{|k|-1} - d_k \rho^{-|k|-1}) e^{ik\theta} = 0 \text{ for } \theta \in [0, 2\pi).$$

Equation (2.13) can be interpreted as the Fourier series for the zero function, whose Fourier coefficients all equal zero, so we conclude that

$$(2.14) \quad d_0 = 0 \quad \text{and} \quad |k|(c_k \rho^{|k|-1} - d_k \rho^{-|k|-1}) = 0 \text{ for } k \in \mathbb{Z} \setminus \{0\}.$$

Solve (2.12) and (2.14) for c_k and d_k and substitute into (2.10) to yield the solution to Laplace's equation on the annulus satisfying the boundary conditions (2.5) and (2.8):

$$(2.15) \quad u(r, \theta) = \sum_{k \in \mathbb{Z}} \left(\frac{f_k}{1 + \rho^{2|k|}} r^{|k|} e^{ik\theta} + \frac{\rho^{2|k|} f_k}{1 + \rho^{2|k|}} r^{-|k|} e^{ik\theta} \right)$$

for all $r \in [\rho, 1]$ and $\theta \in [0, 2\pi)$; u is undefined inside D . From (2.15) we can easily compute the Neumann data on $\partial\Omega$, noting that $\frac{\partial}{\partial \mathbf{n}} = \frac{\partial}{\partial r}$ on this outer boundary, where $r = 1$:

$$(2.16) \quad \frac{\partial u}{\partial \mathbf{n}}(1, \theta) = \sum_{k \in \mathbb{Z}} \frac{|k|(1 - \rho^{2|k|})}{1 + \rho^{2|k|}} f_k e^{ik\theta}.$$

We can compute the solution to Laplace's equation on the open disk (without the void D) by using the same procedure but omitting the $\ln(r)$ and $r^{-|k|} e^{ik\theta}$ terms in (2.10). As one might expect, the solution turns out to be exactly what one obtains from (2.15) with $\rho = 0$. The same observation holds for the Neumann data in (2.16). We should remark that we need to assume f is smooth enough so that the Fourier series (2.16) converges meaningfully, say, pointwise to some continuous function.

Exercise 6. Determine the potential $u(r, \theta)$ in an annulus $\rho \leq r \leq 1$ that satisfies $u(1, \theta) = \cos \theta$ and $\frac{\partial u}{\partial \mathbf{n}}(\rho, \theta) = 0$. Calculate $\frac{\partial u}{\partial \mathbf{n}}(1, \theta)$ to see how the radius ρ of the hole is encoded in this surface information.

2.4. Bad Cloaking. As noted above, one way we might try to hide an object inside Ω is to excavate a void $D = B_\rho(\mathbf{0})$ for some suitable $0 < \rho < 1$ and place the object inside, thereby isolating it electrically from $\partial\Omega$. The observer can gather no information concerning the object, since the Neumann data is given by (2.16) and does not depend on what is inside D . Unfortunately, the expression in (2.16) shows that the Neumann data on the right is clearly dependent on ρ . If $\rho > 0$, the observer will likely be aware that *something* suspicious is going on.

To quantify this, let u_0 denote the solution to Laplace's equation on Ω with Dirichlet data $u_0 = f$, when no void D is present (Ω is empty). Let u be the solution on $\Omega \setminus D$ with $D = B_\rho(\mathbf{0})$, $u = f$ on $\partial\Omega$, and the boundary condition (2.8). We want to compute just how much the Neumann data for u and u_0 differ in terms of ρ . The difference in the Neumann data for u and u_0 is, from (2.16),

$$(2.17) \quad \frac{\partial u}{\partial \mathbf{n}}(1, \theta) - \frac{\partial u_0}{\partial \mathbf{n}}(1, \theta) = - \sum_{k \in \mathbb{Z}} \frac{2|k|\rho^{2|k|}}{1 + \rho^{2|k|}} f_k e^{ik\theta}.$$

A convenient way to measure the magnitude of the difference is to take the $L^2(\partial\Omega)$ norm

$$(2.18) \quad \begin{aligned} \left\| \frac{\partial u}{\partial \mathbf{n}}(1, \theta) - \frac{\partial u_0}{\partial \mathbf{n}}(1, \theta) \right\|_{L^2(\partial\Omega)}^2 &:= \int_0^{2\pi} \left| \frac{\partial u}{\partial \mathbf{n}}(1, \theta) - \frac{\partial u_0}{\partial \mathbf{n}}(1, \theta) \right|^2 d\theta \\ &= 2\pi \sum_{k \in \mathbb{Z}} \frac{4k^2 \rho^{4|k|}}{(1 + \rho^{2|k|})^2} |f_k|^2, \end{aligned}$$

where the last line follows from equation (2.17) and Parseval's identity (see p. 133 of [27]). From (2.18) and the fact that $\frac{\rho^{4|k|}}{(1 + \rho^{2|k|})^2} < \rho^4$ if $0 < \rho < 1$ and $|k| \geq 1$, we see that

$$\left\| \frac{\partial u}{\partial \mathbf{n}}(1, \theta) - \frac{\partial u_0}{\partial \mathbf{n}}(1, \theta) \right\|_{L^2(\partial\Omega)}^2 \leq 8\pi\rho^4 \sum_{k \in \mathbb{Z}} k^2 |f_k|^2 = 4\rho^4 \left\| \frac{\partial u_0}{\partial \mathbf{n}}(1, \theta) \right\|_{L^2(\partial\Omega)}^2.$$

The equality on the right above follows from taking $\rho = 0$ in (2.16) and using Parseval's identity. Taking the square root of each expression above leads to the bound

$$(2.19) \quad \left\| \frac{\partial u}{\partial \mathbf{n}}(1, \theta) - \frac{\partial u_0}{\partial \mathbf{n}}(1, \theta) \right\|_{L^2(\partial\Omega)} \leq 2\rho^2 \left\| \frac{\partial u_0}{\partial \mathbf{n}}(1, \theta) \right\|_{L^2(\partial\Omega)}.$$

In short, if the hole is small, the difference in the Neumann data will be small, proportional to ρ^2 (that is, to the area of the hole). If the observer measures the Neumann data to finite precision, we can hide the object by making ρ so small that it perturbs the Neumann data at a level below the precision threshold—but only if the object fits! If the observer makes measurements of the Neumann data at sufficiently high precision, then (2.19) will dictate a value for ρ too small to hide our object, and this approach won't work.

Exercise 7. Calculate $\left\| \frac{\partial u}{\partial \mathbf{n}}(1, \theta) - \frac{\partial u_0}{\partial \mathbf{n}}(1, \theta) \right\|_{L^2(\partial\Omega)}$ given Dirichlet data $f(\theta) = \cos \theta$ (see Exercise 6 in the previous section).

Exercise 8 (a generalization of Exercise 6). Show that if the Fourier coefficient f_1 is nonzero, then we can in principle determine ρ from the boundary data by evaluating the integral

$$I = \int_0^{2\pi} \frac{\partial u}{\partial \mathbf{n}}(1, \theta) e^{-i\theta} d\theta$$

and then solving $(1 - \rho^2)/(1 + \rho^2) = \frac{I}{2\pi f_1}$ for ρ (note that f_1 can be determined from the Dirichlet data). *Hint:* use (2.16) and orthogonality of the functions $e^{ik\theta}$ on $[0, 2\pi)$.

Exercise 9. Show that if the Fourier coefficient f_1 is nonzero (and note that $f_{-1} = \overline{f_1}$ if f is real), then

$$\left\| \frac{\partial u}{\partial \mathbf{n}}(1, \theta) - \frac{\partial u_0}{\partial \mathbf{n}}(1, \theta) \right\|_{L^2(\partial\Omega)} \geq \frac{4\sqrt{\pi}\rho^2 |f_1|}{1 + \rho^2} \geq 2\sqrt{\pi} |f_1| \rho^2$$

for $\rho \leq 1$. Thus the Neumann data must differ by at least an amount proportional to ρ^2 . *Hint:* simply discard all but the $k = 1$ and $k = -1$ terms in (2.18).

3. Constructing the Cloak. What we need is a way to put a large hole in Ω but make it look like a very small hole to an outside observer, or like no hole at all! We'll show how to do this in the case $D = B_{1/2}(\mathbf{0})$, though it works for a hole of any radius less than 1. The key is to surround the hole D with a ring of material that has a suitable anisotropic conductivity. The required properties of this anisotropic conductivity can be deduced from a simple change-of-variables argument. This argument (in a more general setting) dates back to the paper [12] and is based on an observation by Luc Tartar.

3.1. A Change of Variables. Let's use Ω_ρ to denote the open annulus $\Omega \setminus \overline{B_\rho(\mathbf{0})}$ (the overline denotes the closure of the ball). Choose $\rho \in (0, 1/2)$ and let u be a twice-continuously differentiable solution to Laplace's equation on Ω_ρ , with Dirichlet data f on $\partial\Omega$ and insulating boundary condition (2.8). Let ϕ be an invertible map from $\overline{\Omega_\rho}$ to $\overline{\Omega_{1/2}}$, and suppose ϕ and ϕ^{-1} are twice continuously differentiable. We'll use $\mathbf{x} = (x_1, x_2)$ to denote rectangular coordinates on Ω_ρ and $\mathbf{y} = (y_1, y_2)$ for rectangular coordinates on $\Omega_{1/2}$, so $\mathbf{y} = \phi(\mathbf{x})$. Assume that ϕ maps the inner boundary $\|\mathbf{x}\| = \rho$ of Ω_ρ to the inner boundary $\|\mathbf{y}\| = 1/2$ for $\Omega_{1/2}$, ϕ maps $\|\mathbf{x}\| = 1$ to $\|\mathbf{y}\| = 1$, and that the derivative of ϕ ,

$$D\phi(\mathbf{x}) = \begin{bmatrix} \partial y_1 / \partial x_1 & \partial y_1 / \partial x_2 \\ \partial y_2 / \partial x_1 & \partial y_2 / \partial x_2 \end{bmatrix}$$

is nonsingular on $\overline{\Omega_\rho}$.

Define a function v on $\Omega_{1/2}$ by $v(\mathbf{y}) = u(\phi^{-1}(\mathbf{y}))$ or, equivalently, $v(\phi(\mathbf{x})) = u(\mathbf{x})$. That is, v is simply the function u "pushed forward" from Ω_ρ onto the domain $\Omega_{1/2}$ by the mapping ϕ . Because $\Delta u = 0$ in Ω_ρ , v satisfies a certain differential equation in $\Omega_{1/2}$, the focus of the following lemma.

LEMMA 3.1. *Under the assumptions above the function $v(\mathbf{y})$ satisfies the partial differential equation*

$$(3.1) \quad \nabla \cdot \sigma(\mathbf{y}) \nabla v = 0$$

in $\Omega_{1/2}$, where $\sigma(\mathbf{y})$ denotes the 2×2 matrix

$$(3.2) \quad \sigma(\mathbf{y}) = \frac{D\phi(\mathbf{x})(D\phi(\mathbf{x}))^T}{|\det(D\phi(\mathbf{x}))|}$$

evaluated at $\mathbf{x} = \phi^{-1}(\mathbf{y})$.

Proof. The proof of this lemma can certainly be done by "brute force," that is, by applying the Laplacian in \mathbf{x} to both sides of the relation $u(\mathbf{x}) = v(\phi(\mathbf{x}))$ and using the chain rule, but it's a bit of a mess. A more elegant proof is obtained by using the divergence theorem. First, the chain rule applied to $u(\mathbf{x}) = v(\phi(\mathbf{x}))$ yields

$$\begin{aligned} \frac{\partial u}{\partial x_1}(\mathbf{x}) &= \frac{\partial y_1}{\partial x_1} \frac{\partial v}{\partial y_1}(\phi(\mathbf{x})) + \frac{\partial y_2}{\partial x_1} \frac{\partial v}{\partial y_2}(\phi(\mathbf{x})), \\ \frac{\partial u}{\partial x_2}(\mathbf{x}) &= \frac{\partial y_1}{\partial x_2} \frac{\partial v}{\partial y_1}(\phi(\mathbf{x})) + \frac{\partial y_2}{\partial x_2} \frac{\partial v}{\partial y_2}(\phi(\mathbf{x})). \end{aligned}$$

These equations can be written more compactly as $\nabla_{\mathbf{x}} u(\mathbf{x}) = (D\phi(\mathbf{x}))^T \nabla_{\mathbf{y}} v(\phi(\mathbf{x}))$, where $D\phi$ is as defined above, $\nabla_{\mathbf{x}}$ refers to the gradient in (x_1, x_2) , and $\nabla_{\mathbf{y}}$ refers to the gradient in (y_1, y_2) .

Let $w(\mathbf{x})$ be any continuously differentiable function defined on $\overline{\Omega_\rho}$ with $w = 0$ on $\partial\Omega_\rho$, and define \tilde{w} on $\Omega_{1/2}$ via $\tilde{w}(\mathbf{y}) = w(\phi^{-1}(\mathbf{y}))$ (or $w(\mathbf{x}) = \tilde{w}(\phi(\mathbf{x}))$). Computations

like those above show that $\nabla_{\mathbf{x}}w(\mathbf{x}) = (D\phi(\mathbf{x}))^T \nabla_{\mathbf{y}}\tilde{w}(\phi(\mathbf{x}))$. Since $\Delta_{\mathbf{x}}u = 0$ in Ω_ρ ($\Delta_{\mathbf{x}}$ is the Laplacian in the \mathbf{x} coordinates) we have

$$(3.3) \quad \int_{\Omega_\rho} w(\mathbf{x}) \Delta_{\mathbf{x}} u(\mathbf{x}) \, d\mathbf{x} = 0.$$

Note that $w \Delta_{\mathbf{x}} u = \nabla_{\mathbf{x}} \cdot (w \nabla_{\mathbf{x}} u) - \nabla_{\mathbf{x}} w \cdot \nabla_{\mathbf{x}} u$. Substitute this into (3.3) and apply the divergence theorem to the first term to obtain

$$\int_{\partial\Omega_\rho} w \nabla_{\mathbf{x}} u \cdot \mathbf{n} \, ds - \int_{\Omega_\rho} \nabla_{\mathbf{x}} w \cdot \nabla_{\mathbf{x}} u \, d\mathbf{x} = 0.$$

Because $w \equiv 0$ on $\partial\Omega_\rho$ the first integral above is zero, and we obtain

$$\int_{\Omega_\rho} (\nabla_{\mathbf{x}} w)^T \nabla_{\mathbf{x}} u \, d\mathbf{x} = 0$$

since $\nabla_{\mathbf{x}} w \cdot \nabla_{\mathbf{x}} u = (\nabla_{\mathbf{x}} w)^T \nabla_{\mathbf{x}} u$. By making use of $\nabla_{\mathbf{x}} u(\mathbf{x}) = (D\phi(\mathbf{x}))^T \nabla_{\mathbf{y}} v(\phi(\mathbf{x}))$ and $\nabla_{\mathbf{x}} w(\mathbf{x}) = (D\phi(\mathbf{x}))^T \nabla_{\mathbf{y}} \tilde{w}(\phi(\mathbf{x}))$, we can write the last equation as

$$\int_{\Omega_\rho} \nabla_{\mathbf{y}} \tilde{w}(\phi(\mathbf{x}))^T (D\phi(\mathbf{x})) (D\phi(\mathbf{x}))^T \nabla_{\mathbf{y}} v(\phi(\mathbf{x})) \, d\mathbf{x} = 0.$$

Now make a change of variables to the \mathbf{y} coordinate system, with $\phi(\mathbf{x}) = \mathbf{y}$ and $d\mathbf{x} = d\mathbf{y}/|\det(D\phi)|$. We find

$$(3.4) \quad \int_{\Omega_{1/2}} (\nabla_{\mathbf{y}} \tilde{w}(\mathbf{y}))^T (\sigma(\mathbf{y}) \nabla_{\mathbf{y}} v(\mathbf{y})) \, d\mathbf{y} = 0$$

with $\sigma(\mathbf{y})$ as in the statement of the lemma. A straightforward calculation shows that

$$(3.5) \quad \begin{aligned} & (\nabla_{\mathbf{y}} \tilde{w}(\mathbf{y}))^T (\sigma(\mathbf{y}) \nabla_{\mathbf{y}} v(\mathbf{y})) \\ &= \nabla_{\mathbf{y}} \tilde{w}(\mathbf{y}) \cdot (\sigma(\mathbf{y}) \nabla_{\mathbf{y}} v(\mathbf{y})) \\ &= \nabla_{\mathbf{y}} \cdot (\tilde{w}(\mathbf{y}) \sigma(\mathbf{y}) \nabla_{\mathbf{y}} v(\mathbf{y})) - \tilde{w}(\mathbf{y}) \nabla_{\mathbf{y}} \cdot (\sigma(\mathbf{y}) \nabla_{\mathbf{y}} v(\mathbf{y})). \end{aligned}$$

If we use (3.5) to replace the integrand on the left in (3.4), we find

$$\int_{\Omega_{1/2}} \nabla_{\mathbf{y}} \cdot (\tilde{w}(\mathbf{y}) \sigma(\mathbf{y}) \nabla_{\mathbf{y}} v(\mathbf{y})) \, d\mathbf{y} - \int_{\Omega_{1/2}} \tilde{w}(\mathbf{y}) \nabla_{\mathbf{y}} \cdot (\sigma(\mathbf{y}) \nabla_{\mathbf{y}} v(\mathbf{y})) \, d\mathbf{y} = 0.$$

An application of the divergence theorem to the first integral on the left above, along with the fact that $\tilde{w}(\mathbf{y}) \equiv 0$ on $\partial\Omega_{1/2}$, shows that in fact this integral equals zero, and we are left with (after dropping the leading minus sign)

$$(3.6) \quad \int_{\Omega_{1/2}} \tilde{w}(\mathbf{y}) \nabla_{\mathbf{y}} \cdot (\sigma(\mathbf{y}) \nabla_{\mathbf{y}} v(\mathbf{y})) \, d\mathbf{y} = 0.$$

The function $\tilde{w}(\mathbf{y})$ is arbitrary (since given any \tilde{w} we could have chosen $w(\mathbf{x}) = \tilde{w}(\phi^{-1}(\mathbf{x}))$ back on Ω_ρ), so (3.6) holds for any continuously differentiable \tilde{w} . We claim this forces $\nabla_{\mathbf{y}} \cdot (\sigma(\mathbf{y}) \nabla_{\mathbf{y}} v(\mathbf{y}))$ to be identically zero in $\Omega_{1/2}$.

To show this, let $h(\mathbf{y})$ denote the quantity $\nabla_{\mathbf{y}} \cdot (\sigma(\mathbf{y}) \nabla_{\mathbf{y}} v(\mathbf{y}))$ in the integrand in (3.6). From the assumptions on ϕ and u the function h is continuous in $\Omega_{1/2}$. Suppose

in contradiction to the claim that h is not identically zero on $\Omega_{1/2}$, say, $h(\mathbf{y}) > 0$ at some point \mathbf{y}_0 . Since $h(\mathbf{y})$ is continuous we have $h(\mathbf{y}) > 0$ in a ball $B_\delta(\mathbf{y}_0) \subset \Omega_{1/2}$ for some $\delta > 0$. We can choose some function $\tilde{w}(\mathbf{y}) \geq 0$ which is positive in $B_\delta(\mathbf{y}_0)$ and $\tilde{w}(\mathbf{y}) \equiv 0$ outside of $B_\delta(\mathbf{y}_0)$. As a result the product $\tilde{w}(\mathbf{y})h(\mathbf{y}) \geq 0$ in $\Omega_{1/2}$ and $\tilde{w}(\mathbf{y})h(\mathbf{y})$ is not identically zero. But then the integral in (3.6) cannot equal zero, a contradiction. We conclude that $h(\mathbf{y}) = \nabla \cdot (\sigma(\mathbf{y})\nabla v(\mathbf{y})) = 0$ in $\Omega_{1/2}$, and this proves the lemma. \square

The matrix σ defined by (3.2) is positive definite; see Exercise 10. Comparison of (3.1) to (2.7) shows that v can be considered as the electric potential inside $\Omega_{1/2}$ corresponding to the anisotropic conductivity σ . It is this observation that will allow us to design an anisotropic conductivity to cloak the ball $B_{1/2}(\mathbf{0})$.

Exercise 10. Show that the matrix $\sigma(\mathbf{y})$ defined by equation (3.2) is symmetric and positive definite for each \mathbf{y} , that is, satisfies $\mathbf{w}^T \sigma(\mathbf{y}) \mathbf{w} > 0$ for each nonzero vector $\mathbf{w} \in \mathbb{R}^2$.

3.2. Designing the Cloak. The properties we need from the layer of anisotropic material surrounding $D = B_{1/2}(\mathbf{0})$ can be deduced by considering functions $\phi : \Omega_\rho \rightarrow \Omega_{1/2}$ with the specific form

$$(3.7) \quad \phi(\mathbf{x}) = \frac{\psi(\|\mathbf{x}\|)}{\|\mathbf{x}\|} \mathbf{x}$$

so that $\mathbf{y} = \phi(\mathbf{x})$ means $y_1 = \frac{\psi(\|\mathbf{x}\|)}{\|\mathbf{x}\|} x_1$ and $y_2 = \frac{\psi(\|\mathbf{x}\|)}{\|\mathbf{x}\|} x_2$, where ψ is a function chosen so that

- $\psi(\rho) = 1/2$ (ϕ maps the inner boundary of Ω_ρ to that of $\Omega_{1/2}$);
- for some $\delta \in (0, 1/2)$ we have $\psi(r) = r$ for $1/2 + \delta < r < 1$ (so ϕ fixes a neighborhood $1/2 + \delta < \|\mathbf{x}\| \leq 1$ of the outer boundary at $\|\mathbf{x}\| = 1$);
- the function ψ is twice continuously differentiable, with $\psi'(r) \geq d_0 > 0$ for some d_0 , so ψ will be strictly increasing and invertible.

The mapping ϕ simply “pushes” points in Ω_ρ radially outward from the origin, at least for $\rho \leq \|\mathbf{x}\| < 1/2 + \delta$. There are many ways to rig up such a ψ , for example,

$$(3.8) \quad \psi(r) = \begin{cases} \frac{1}{2} + \frac{\delta}{1-2\rho}(r - \rho), & \rho \leq r \leq \frac{1}{2}, \\ g(r), & \frac{1}{2} < r < \frac{1}{2} + \delta, \\ r, & \frac{1}{2} + \delta \leq r \leq 1, \end{cases}$$

where $g(r)$ is a suitably chosen function to smoothly interpolate between the two regions on which ψ is linear. The precise formula for g isn't important at the moment. A typical ψ and the resulting mapping of Ω_ρ to $\Omega_{1/2}$ is shown in Figure 3.1.

Under such a mapping ϕ we have $\mathbf{y} = \mathbf{x}$ in a neighborhood $1/2 + \delta \leq r \leq 1$ of the outer boundary, and so $u \equiv v$ in this region. The function $v = u \circ \phi^{-1}$ also has zero Neumann data on the inner boundary $\|\mathbf{y}\| = 1/2$. Specifically, we have

$$\begin{aligned} \frac{\partial v}{\partial \mathbf{n}} \Big|_{\|\mathbf{y}\|=1/2} &= -\frac{\partial v}{\partial \|\mathbf{y}\|} \Big|_{\|\mathbf{y}\|=1/2} \left(\text{recall } \frac{\partial}{\partial \mathbf{n}} = -\frac{\partial}{\partial \|\mathbf{y}\|} \text{ on } \|\mathbf{y}\| = 1/2 \right) \\ &= -\frac{\partial \|\mathbf{x}\|}{\partial \|\mathbf{y}\|} \frac{\partial u}{\partial \|\mathbf{x}\|} \Big|_{\|\mathbf{x}\|=\rho} \\ &= -\frac{1-2\rho}{\delta} \frac{\partial u}{\partial \|\mathbf{x}\|} \Big|_{\|\mathbf{x}\|=\rho} \\ &= 0, \end{aligned}$$

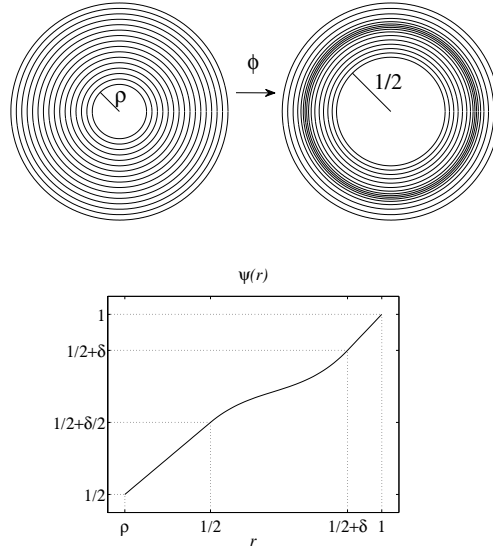


Fig. 3.1 An example of a function $\phi(\mathbf{x}) = \frac{\psi(\|\mathbf{x}\|)}{\|\mathbf{x}\|}\mathbf{x}$, where $\psi(r)$ is defined via (3.8). Note that ϕ maps a circle of radius r to a circle of radius $\psi(r)$.

where we make use of $\|\mathbf{y}\| = \psi(\|\mathbf{x}\|)$ and the first case in (3.8), which yields $\frac{\partial\|\mathbf{y}\|}{\partial\|\mathbf{x}\|} = \delta/(1-2\rho)$ at $\|\mathbf{x}\| = \rho$, hence $\frac{\partial\|\mathbf{x}\|}{\partial\|\mathbf{y}\|} = (1-2\rho)/\delta$.

Exercise 11. Write out the conditions on $g(r)$, $g'(r)$, and $g''(r)$ at $r = 1/2$ and $r = 1/2 + \delta$ that make ψ in (3.8) twice continuously differentiable. In the case $\rho = 1/10, \delta = 1/10$, find such a function g . *Hint:* try a 5th degree polynomial; a computer algebra system might help!

3.3. The Conductivity σ Is an Approximate Cloak. We claim that the conductivity σ defined by (3.2) can be used to cloak the void D to any desired degree, with ρ as a parameter that controls the quality of the cloak. To see this, note that the matrix σ corresponds to the scalar conductivity 1 on $\Omega_{1/2}$ when $\|\mathbf{y}\| > 1/2 + \delta$, that is, in a neighborhood of the outer boundary, and as remarked above v and u are equal in this region. This means that u and v have precisely the same Dirichlet and Neumann data on $\partial\Omega$. In the “cloaking region” $1/2 < \|\mathbf{y}\| < 1/2 + \delta$ the quantity $\sigma(y)$ corresponds to an anisotropic conductivity. In light of the estimate (2.19) and $\partial v/\partial\mathbf{n} = \partial u/\partial\mathbf{n}$ on $\partial\Omega$ we see that

$$(3.9) \quad \left\| \frac{\partial v}{\partial\mathbf{n}}(1, \theta) - \frac{\partial u_0}{\partial\mathbf{n}}(1, \theta) \right\|_{L^2(\partial\Omega)} = \rho^2 \left\| \frac{\partial u_0}{\partial\mathbf{n}}(1, \theta) \right\|_{L^2(\partial\Omega)},$$

even though v is the potential on a region $\Omega_{1/2}$ with a central hole of radius $1/2$. By making ρ close to zero we can make the Neumann data for v as close as we like to the Neumann data for u_0 —we can make the region with a hole of size $1/2$ look as close to empty as we like! See Figure 3.2 for an example.

3.4. Behavior in the Cloaking Region. It’s extremely interesting to examine the behavior of σ in the inner cloaking region $1/2 \leq \|\mathbf{y}\| \leq 1/2 + \delta/2$, near $\|\mathbf{y}\| = 1/2$.

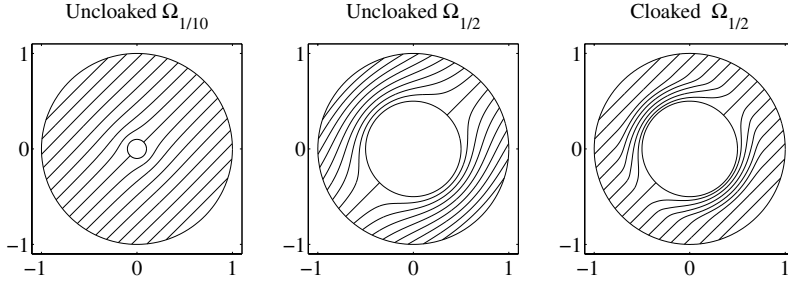


Fig. 3.2 Comparison of uncloaked and cloaked solutions on annuli. The left and middle graphs show flow lines of the current $\mathbf{J} = -\gamma \nabla u$, where u is a solution of Laplace's equation with Dirichlet condition $f(\theta) = \cos \theta + \sin \theta$ (the potential applied by the observer) on the outer boundary of annuli with constant conductivity. The graph on the right shows flow lines of the current $\mathbf{J} = -\sigma \nabla v$ for the approximately cloaked ball, with anisotropic conductivity σ corresponding to $\rho = 1/10$.

This region corresponds to $\rho < \|\mathbf{x}\| < 1/2$, the first case for ψ in (3.8). In particular, let's examine the eigenvectors and eigenvalues of σ , corresponding to the directions of maximal and minimal conductivity.

From (3.7) it's not hard to compute that

$$(3.10) \quad D\phi = (\psi'(r)/r^2 - \psi(r)/r^3) \begin{bmatrix} x_1^2 & x_1 x_2 \\ x_1 x_2 & x_2^2 \end{bmatrix} + (\psi(r)/r) \mathbf{I},$$

where \mathbf{I} is the identity matrix and $r = \|\mathbf{x}\| = \psi^{-1}(\|\mathbf{y}\|)$. In particular, note that $D\phi$ is symmetric, so that from (3.2) we have $\sigma = (D\phi)^2 / |\det(D\phi)|$.

Exercise 12. Let \mathbf{v} be an eigenvector with eigenvalue μ for an $n \times n$ matrix \mathbf{A} , and let $\mathbf{B} = \mathbf{A}^2 / |\det(\mathbf{A})|$. Show that \mathbf{v} is also an eigenvector for \mathbf{B} , with eigenvalue $\lambda = \mu^2 / |\det(\mathbf{A})|$.

Exercise 13. Show that the 2×2 matrix with entries $x_1^2, x_1 x_2, x_2^2$ on the right in (3.10) has (orthogonal) eigenvectors $[x_1, x_2]^T$ and $[-x_2, x_1]^T$, with eigenvalues $r^2 = \|\mathbf{x}\|^2$ and 0, respectively.

If we can compute the eigenvectors and eigenvalues for $D\phi$, then we can make use of Exercise 12 to find these quantities for σ . The eigenvectors and eigenvalues for $D\phi$ follow easily from Exercise 13: the multiplication of the matrix with entries x_1^2 , etc., by $(\psi'(r)/r^2 - \psi(r)/r^3)$ and the shift by $(\psi(r)/r)\mathbf{I}$ show that $D\phi$ also has eigenvectors $\mathbf{v}_1 = [x_1, x_2]^T$ and $\mathbf{v}_2 = [-x_2, x_1]^T$, with corresponding eigenvalues $\mu_1 = (\psi'(r) - \psi(r)/r) + \psi(r)/r = \psi'(r)$ and $\mu_2 = \psi(r)/r$. Note also that $\det(D\phi) = \mu_1 \mu_2$. From Exercise 12 we then find that σ has eigenvectors $\mathbf{v}_m = \mathbf{v}_1$ and $\mathbf{v}_M = \mathbf{v}_2$ (the same as $D\phi$, but relabeled to indicate what will be the directions of maximum and minimum conductivity). The corresponding eigenvalues or conductivities are

$$(3.11) \quad \begin{aligned} \gamma_m &= \frac{\mu_1^2}{\mu_1 \mu_2} = \frac{r\psi'(r)}{\psi(r)}, \\ \gamma_M &= \frac{\mu_2^2}{\mu_1 \mu_2} = \frac{\psi(r)}{r\psi'(r)}. \end{aligned}$$

In particular, the conductivities are reciprocals of each other!

The vector \mathbf{v}_m points radially outward from the origin and \mathbf{v}_M is tangential to any circle centered at the origin. Indeed, at a point $x_1 = r \cos(\theta), x_2 = r \sin(\theta)$ we may as well take $\mathbf{v}_m = (\cos \theta)\hat{i} + (\sin \theta)\hat{j}$, since eigenvectors can be rescaled. Similarly, we may take $\mathbf{v}_M = -(\sin \theta)\hat{i} + (\cos \theta)\hat{j}$. If we use (3.11) to examine the behavior of σ in the inner cloaking region $1/2 < \|\mathbf{y}\| < 1/2 + \delta/2$ (corresponding to $\rho < \|\mathbf{x}\| < 1/2$) and make use of (3.8), we find the conductivities in this region are given by

$$(3.12) \quad \gamma_m(r) = \frac{2r\delta}{1 + 2r\delta - 2\rho - 2\delta\rho}, \quad \gamma_M(r) = \frac{1 + 2r\delta - 2\rho - 2\delta\rho}{2r\delta} = \frac{1}{\gamma_m(r)}.$$

Note that we can express the eigenvalues in terms of \mathbf{y} via $r = \psi^{-1}(\|\mathbf{y}\|)$. At the inner surface $\|\mathbf{y}\| = 1/2$ (corresponding to $r = \rho$) on $\Omega_{1/2}$ we have

$$\gamma_m = \frac{2\rho\delta}{1 - 2\rho}, \quad \gamma_M = \frac{1 - 2\rho}{2\rho\delta}.$$

When ρ is close to zero, $\gamma_M \approx \frac{1}{2\rho\delta}$ is large, so the conductivity in the tangential direction on the circle $\|\mathbf{y}\| = 1/2$ is very large. Similarly, $\gamma_m \approx 2\rho\delta$ is close to zero in this case, so the conductivity in the normal direction is low. Physically, a “ray” (really, an electron) approaches $\|\mathbf{y}\| = 1/2$ and is diverted in the direction of the high conductivity, routed tangentially around the ball $B_{1/2}(\mathbf{0})$, then ejected out the other side to continue on its way. Mr. Spock’s “selective bending of light rays” (or in this case, electric current) is realized but is now grounded in the real laws of physics! For example, look at the flows near $R = 1/2$ in the rightmost graph in Figure 3.2.

Exercise 14. It may seem surprising that the eigenvalues for σ defined by equation (3.2) are reciprocal. Is it an artifact of the very special radial transformation ϕ ? No! Show that if \mathbf{A} is a nonsingular 2×2 matrix, then the matrix

$$\mathbf{M} = \frac{\mathbf{A}\mathbf{A}^T}{|\det(\mathbf{A})|}$$

has reciprocal eigenvalues. *Hint:* note that $\mathbf{M} = \mathbf{B}/\sqrt{\det(\mathbf{B})}$, where \mathbf{B} is positive-definite. Now recall that the determinant of a matrix is the product of the eigenvalues of the matrix.

Exercise 15. Work out the eigenvalues for σ in the transition region $1/2 + \delta/2 < \|\mathbf{y}\| < 1/2 + \delta$ (corresponding to $1/2 < \|\mathbf{x}\| < 1/2 + \delta$) in terms of $g(r)$ and $g'(r)$. Show that the conductivities smoothly transition from those in (3.12) to those for an isotropic conductor of conductivity 1.

3.5. The Perfect Cloak. Of course, it’s natural to consider letting $\rho \rightarrow 0^+$ above to obtain the perfect invisibility cloak. This can be done! (See section 4 of [13] for how to rigorously carry out a singular change of variables to yield a perfect cloak.) However, if we look at the eigenvalues for σ , we see that γ_m evaluated along the inner boundary $\|\mathbf{y}\| = 1/2$ goes to zero as $\rho \rightarrow 0$, while γ_M goes to infinity; both eigenvectors are unchanged. This corresponds to perfect conductance around $\|\mathbf{y}\| = 1/2$, perfect insulation across this curve, which may not be physically realistic. Still, by making ρ small but nonzero we can get a “practical” cloak of any desired strength without singular behavior.

Exercise 16. Carry out the analogous computations in three dimensions! (It really is quite the same: Lemma 3.1 still holds, and the remaining computations are similar to the two-dimensional case. You don’t need to solve Laplace’s equation.) In

particular, show that as $\rho \rightarrow 0^+$, one of the eigenvalues for the cloaking conductivity σ (corresponding to conductivity in the radial direction) approaches zero, while the other two eigenvalues (corresponding to tangential directions to $B_{1/2}(\mathbf{0})$) remain finite.

3.6. Anisotropic Conductors and Metamaterials. Although many natural materials have anisotropic conductivity, how does one actually design a material with desired anisotropic properties? One approach is to use homogeneous, isotropic materials and introduce periodic microstructure, e.g., put holes or cracks in the material in a specific pattern, but on a very small scale. By imposing periodic microstructure we obtain a material that, macroscopically, appears to have anisotropic properties. The mathematical theory involved in analyzing how periodic microstructure yields given macroscopic properties is called *homogenization*, and the techniques apply to far more than electrical conduction; they can be applied to many situations involving a physical system governed by differential equations.

We won't go into the details of homogenization here, but as a simple example, in [3] the authors show how one can obtain a conductive material that appears macroscopically to be an anisotropic electrical conductor, by introducing periodic cracks into a homogeneous isotropic conductor. Specifically, consider the box $-\epsilon < x_1, x_2 < \epsilon$ in \mathbb{R}^2 , with isotropic conductivity γ . We introduce an insulating crack into the box; the crack is linear with center at $(0, 0)$, and lies at angle α with respect to horizontal. The authors in [3] show that if we “tile” a region Ω in the plane with a collection of these 2ϵ by 2ϵ boxes and let $\epsilon \rightarrow 0$, the region Ω has effective anisotropic conductivity σ of the form

$$\sigma = \gamma \mathbf{I} - \gamma R \begin{bmatrix} \sin^2(\alpha) & -\sin(\alpha)\cos(\alpha) \\ -\sin(\alpha)\cos(\alpha) & \cos^2(\alpha) \end{bmatrix},$$

where R is a parameter that depends on the angle α and the length of the crack relative to the width of the box. By adjusting the angle and length of the cracks (relative to their spacing), as well as γ , one can in principle obtain any anisotropic conductivity profile. Similar results can be obtained by introducing periodic holes or other shapes.

4. Conclusion. In this article, we have described the essential idea behind the “transformation optics” approach to cloaking in two dimensions for imaging with impedance tomography. The transformation here is the mapping ϕ of section 3.1, which dictates, via equation 3.2, the necessary properties of the cloaking conductivity. More realistically, one could apply these ideas to Maxwell's equations in three dimensions (see pp. 358–361 of [27] for an overview of Maxwell's equations), at nonzero frequencies, and use a singular change of variables in order to achieve a perfect cloak (rather than a near-cloak), as derived in [7]. One key question of interest is whether one can cloak over a large range of frequencies, rather than merely at a particular frequency, as the range of frequencies is severely restricted for some cloaking formulations [4]; however, the problems are primarily physical and engineering in nature, not mathematical. By avoiding metamaterials whose properties depend on resonance, researchers have recently discovered that cloaking for a range of frequencies in the electromagnetic spectrum may indeed be possible and may even work for visible light [17, 18].

The field of cloaking is extremely active, with many intriguing ideas emerging. For example, Lai and colleagues have designed a device that can cloak an object from a distance (the device is designed specially for a particular object at a specified location relative to the cloaking device) [15]. Cloaking effects can also be generated by

anomalous localized resonance [21], which occurs near a “superlens,” a metamaterial with negative refraction index that can yield resolution finer than the wavelength of the light being used to generate the image [23]. Cloaking has been explored in contexts other than electromagnetic waves, such as for elasticity waves [20] and for matter waves (quantum cloaking) [29].

The topic of cloaking suggests many interesting research projects for undergraduates to pursue. Here are a few open-ended suggestions for possible directions to explore. No claims are made or implied concerning the ease or even possibility of solving these! In particular, the area is evolving very rapidly, with many people working on ideas related to the first project below.

1. Our approach to cloaking was to make a large hole look like a small hole. Can we do the reverse—make a small hole look large? Even more generally, can this change-of-variables technique be used to disguise rather than hide D ? For example, can $D = B_{1/2}(\mathbf{0})$ be made to look like an ellipse or some other shape? What are the limitations?
2. Could one construct a “directional cloak” that renders an object (approximately) invisible from some directions, fully visible from others? Think of some kind of device you carry into battle, so that from the front (where your enemies are) you’re invisible, but from behind (where your allies are) you’re visible. (Based on a question asked by J. Christopher Twedde at the University of Evansville.)
3. Another form of energy that has been used for imaging is heat. Suppose $v(x_1, x_2, t)$ satisfies the heat equation $v_t - \Delta v = 0$ in the unit disk $\Omega = B_1(\mathbf{0})$ (here v is the temperature of Ω). For simplicity, suppose v is time-harmonic, that is, $v(x_1, x_2, t) = e^{i\omega t}u(x_1, x_2)$. Then $\Delta u + i\omega u = 0$. An observer probes the interior of Ω by imposing a temperature $u = f$ on $\partial\Omega$, then measures the heat flux $\frac{\partial u}{\partial \mathbf{n}}$ on $\partial\Omega$. Can we cloak a void $D = B_{1/2}(\mathbf{0})$ using the technique for impedance imaging? If $\omega = 0$, it’s the same problem, so assume $\omega > 0$.

REFERENCES

- [1] A. ALU AND N. ENGHETA, *Cloaking and transparency for collections of particles with metamaterial and plasmonic covers*, *Optics Express*, 15 (2007), pp. 7578–7590
- [2] C. BARRAS, *Invisibility cloak could hide buildings from quakes*, <http://www.newscientist.com/article/dn17378>, June 26, 2009.
- [3] K. BRYAN AND M. VOGELIUS, *Effective behavior of clusters of microscopic cracks inside a homogeneous conductor*, *Asymptot. Anal.*, 16 (1998), pp. 141–179.
- [4] H. CHEN, Z. LIANG, P. YAO, X. JIANG, H. MA, AND C. T. CHAN, *Extending the bandwidth of electromagnetic cloaks*, *Phys. Rev. B*, 76 (2007), article 241104(R).
- [5] M. CHENEY, D. ISAACSON, AND J. C. NEWELL, *Electrical impedance tomography*, *SIAM Rev.*, 41 (1999), pp. 85–101.
- [6] A. GREENLEAF, M. LASSAS, AND G. UHLMANN, *On nonuniqueness for Calderón’s inverse problem*, *Math. Res. Lett.*, 10 (2003), pp. 685–693.
- [7] A. GREENLEAF, Y. KURYLEV, M. LASSAS, AND G. UHLMANN, *Full-wave invisibility of active sources at all frequencies*, *Comm. Math. Phys.*, 275 (2007), pp. 749–789.
- [8] A. GREENLEAF, Y. KURYLEV, M. LASSAS, AND G. UHLMANN, *Invisibility and inverse problems*, *Bull. Amer. Math. Soc.*, 46 (2009), pp. 55–97.
- [9] A. GREENLEAF, Y. KURYLEV, M. LASSAS, AND G. UHLMANN, *Cloaking devices, electromagnetic wormholes, and transformation optics*, *SIAM Rev.*, 51 (2009), pp. 3–33.
- [10] F. HAPGOOD AND A. GRANT, *Metamaterial revolution: The new science of making anything disappear*, *Discover*, <http://discovermagazine.com/2009/apr/10-metamaterial-revolution-new-science-making-anything-disappear> (accessed 4/21/2009).
- [11] D. ISAACSON, J. MUELLER, J. NEWELL, AND S. SILTANEN, *Imaging cardiac activity by the D-Bar method for electrical impedance tomography*, *Physiol. Meas.*, 27 (2006), pp. 45–50.

- [12] R. V. KOHN AND M. VOGELIUS, *Identification of an unknown conductivity by means of measurements at the boundary*, in *Inverse Problems*, SIAM-AMS Proc. 14, D.W. McLaughlin, ed., AMS, Providence, RI, 1984, pp. 113–123.
- [13] R. V. KOHN, H. SHEN, M. S. VOGELIUS, AND M. I. WEINSTEIN, *Cloaking via change of variables in electric impedance tomography*, *Inverse Problems*, 24 (2008), article 015016.
- [14] B. KOLATA, *Manipulating electromagnetic fields: Mathematics, metamaterials, and cloaking*, *SIAM News*, 41 (Sept. 2008).
- [15] Y. LAI, H. CHEN, Z. ZHANG, AND C. T. CHAN, *Complementary media invisibility cloak that cloaks objects at a distance outside the cloaking shell*, *Phys. Rev. Lett.*, 102 (2009), article 093902.
- [16] U. LEONHARDT, *Optical conformal mapping*, *Science*, 312 (2006), pp. 1777–1780.
- [17] U. LEONHARDT AND T. TYC, *Broadband invisibility by non-euclidean cloaking*, *Science*, 323 (2009), pp. 110–111.
- [18] R. LIU, C. JI, J. J. MOCK, J. Y. CHIN, T. J. CUI, AND D. R. SMITH, *Broadband ground-plane cloak*, *Science*, 323:5912 (2009), pp. 366–369.
- [19] D. MILLER, *On perfect cloaking*, *Opt. Express*, 14 (2006), pp. 12457–12466.
- [20] G. W. MILTON, M. BRIANE, AND J. R. WILLIS, *On cloaking for elasticity and physical equations with a transformation invariant form*, *New J. Phys.*, 8 (2006), article 248.
- [21] G. W. MILTON AND N.-A. P. NICOROVICI, *On the cloaking effects associated with anomalous localized resonance*, *Proc. R. Soc. Lond. Ser. A Math. Phys. Eng. Sci.*, 462 (2006), pp. 3027–3059.
- [22] J. MULLINS ET AL., *Ten sci-fi devices that could soon be in your hands*, *New Scientist*, 2692, <http://www.newscientist.com/article/mg20126921.800-ten-sci-fi-devices-that-could-soon-be-in-your-hands.html> (accessed 4/17/2009).
- [23] J. B. PENDRY, *Negative refraction makes a perfect lens*, *Phys. Rev. Lett.*, 85 (2000), pp. 3966–3969.
- [24] J. B. PENDRY, D. SCHURIG, AND D. R. SMITH, *Controlling electromagnetic fields*, *Science*, 312 (2006), pp. 1780–1782.
- [25] L. SAUNDERS, *Cloaked eye still sees*, *Science News*, April 15, 2009, http://www.sciencenews.org/view/generic/id/42803/title/Cloaked_eye_still_sees (accessed 4/21/2009).
- [26] D. SCHURIG, J. J. MOCK, B. J. JUSTICE, S. A. CUMMER, J. B. PENDRY, A. F. STARR, AND D. R. SMITH, *Metamaterial electromagnetic cloak at microwave frequencies*, *Science*, 314:5801 (2006), pp. 977–980.
- [27] W. STRAUSS, *Partial Differential Equations: An Introduction*, John Wiley & Sons, New York, 1992.
- [28] S. XI, H. CHEN, B. ZHANG, B. WU, AND J. A. KONG, *Route to low-scattering cylindrical cloaks with finite permittivity and permeability*, *Phys. Rev. B*, 79 (2009), article 155122.
- [29] S. ZHANG, D. A. GENOV, C. SUN, AND X. ZHANG, *Cloaking of matter waves*, *Phys. Rev. Lett.*, 100 (2008), article 123002.